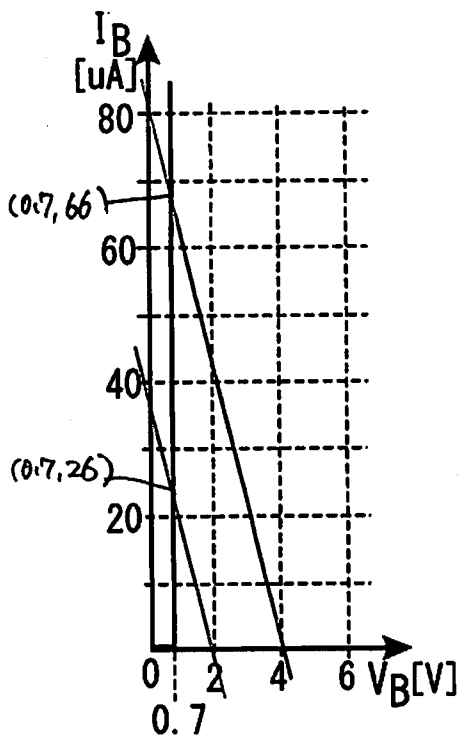


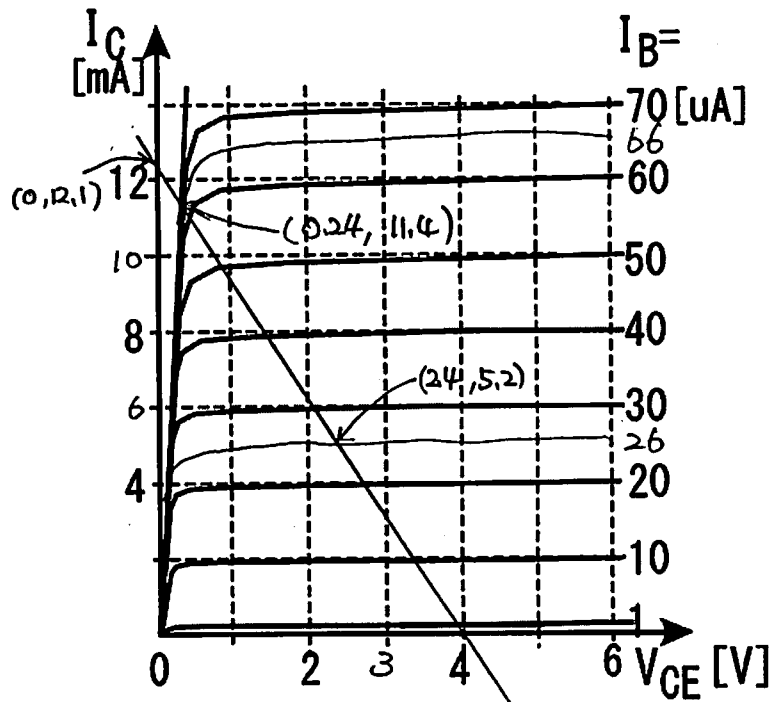
4.

(1)

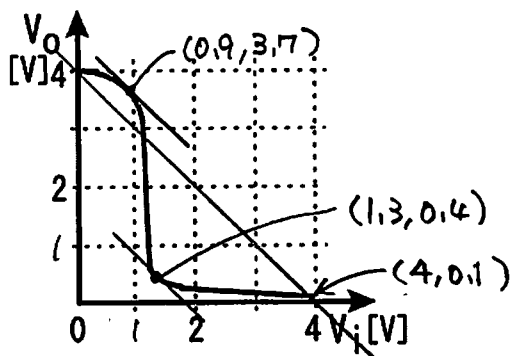
(1)	$P \neq 1$	(2)	合計	(3)	$V_C = I_B R_B + V_{BE}$
(4)	$V_{CC} = V_{CE} + R_L I_C$	(5)	0	(6)	0
(7)	0	(8)	0.7	(9)	4
(10)	→ 26	(11)	0.7	(12)	5.2
(13)	2.4V	(14)	66	(15)	0.7
(16)	11.4	(17)	0.24	(18)	1.3V
(19)	4V	(20)	0V	(21)	0.9V
(22)	3.7V	(23)	4V	(24)	0.1V
(25)	0.4V	(26)	2.4	(27)	0.5



(a) $V_{BE}-I_B$ 特性



(b) $V_{CE}-I_C$ 特性



(d) 入出力特性測定結果

